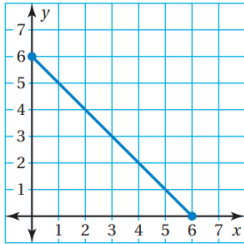


DISCRETE & CONTINUOUS

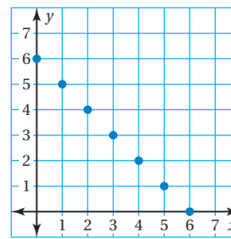
Name: _____

Is the domain of the function discrete or continuous?

1. _____



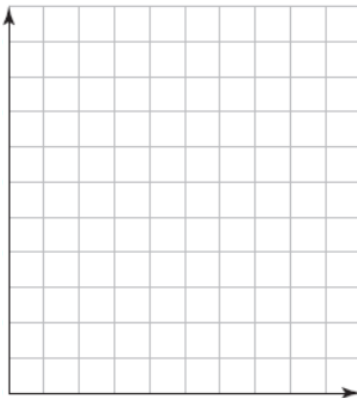
2. _____



Graph the function. Is the domain of the function discrete or continuous?

3. _____

Input Bags, x	Output Marbles, y
2	20
4	40
6	60



4. _____

Input Years, x	Output Height of a Tree, y (feet)
0	3
1	6
2	9



5. _____

Input Width, x (inches)	Output Volume, y (cubic inches)
5	50
10	100
15	150



6. _____

Input Hats, x	Output Cost, y (dollars)
0	0
1	8.45
2	16.9

