

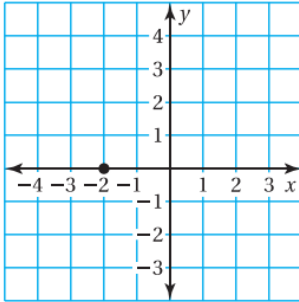
Writing Equations: POINT & SLOPE

Name: _____

Write an equation of the line with the given slope that goes through the given point.

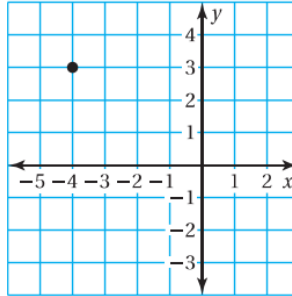
1. _____

$$m = \frac{1}{2}$$



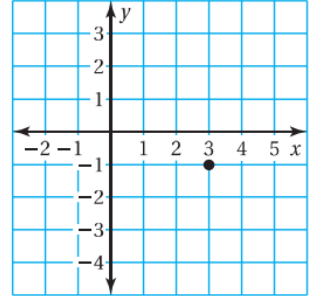
2. _____

$$m = -\frac{3}{4}$$



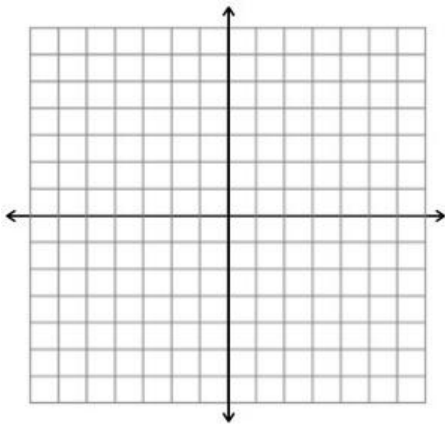
3. _____

$$m = 1$$



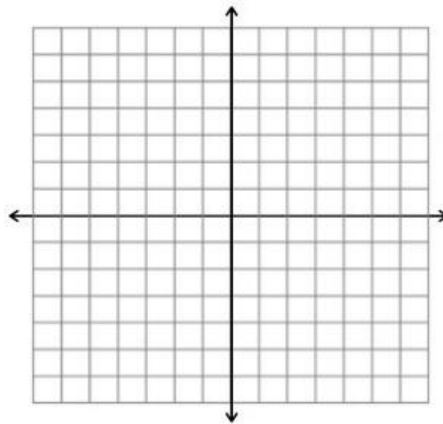
4. _____

$$m = -\frac{2}{3} \text{ \& } (3, 0)$$



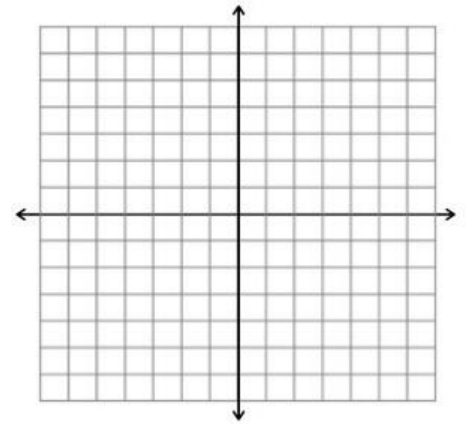
5. _____

$$m = \frac{3}{4} \text{ \& } (4, 6)$$



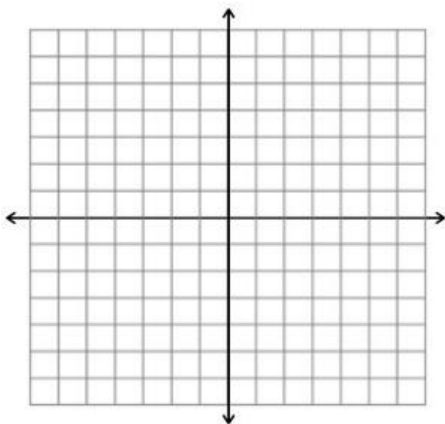
6. _____

$$m = 4 \text{ \& } (1, -3)$$



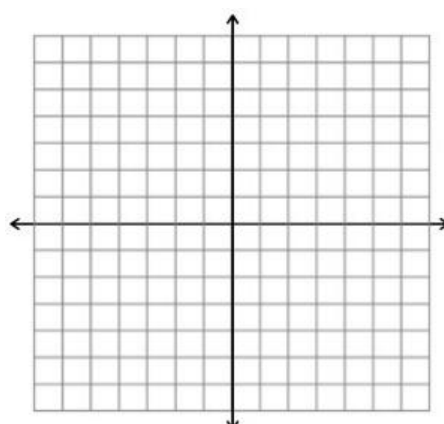
7. _____

$$m = -\frac{1}{7} \text{ \& } (7, -5)$$



8. _____

$$m = \frac{5}{3} \text{ \& } (3, 3)$$



9. _____

$$m = -2 \text{ \& } (-1, -4)$$

